

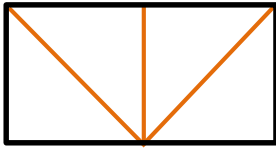
## Possible Solutions

a) Draw lines to show how you can form the shapes below with this shape.



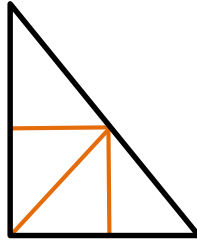
b) Use the names of the shapes to explain your example.

1)



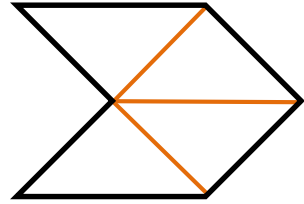
I used 4 triangles that had a square corner to make a rectangle.

2)



I used 4 triangles that had a square corner to make a larger triangle with one square corner.

3)



I used 4 triangles that had a square corner to make a hexagon.

Other possible solutions

